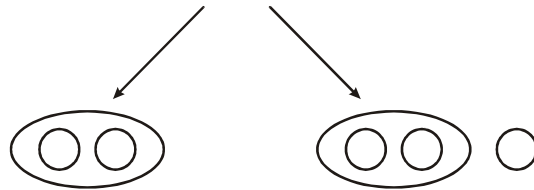




## PAR E IMPAR



\* Resuelve:

$$\begin{array}{r} 93 + \\ \underline{43} \end{array}$$

$$\begin{array}{r} 55 + \\ \underline{65} \end{array}$$

$$\begin{array}{r} 143 + \\ \underline{100} \end{array}$$

$$\begin{array}{r} 158 + \\ \underline{41} \end{array}$$

$$\begin{array}{r} 112 + \\ \underline{10} \end{array}$$

$$\begin{array}{r} 109 + \\ \underline{21} \end{array}$$

$$\begin{array}{r} 163 + \\ \underline{56} \end{array}$$

$$\begin{array}{r} 172 + \\ \underline{57} \end{array}$$

$$\begin{array}{r} 162 + \\ \underline{122} \end{array}$$

$$\begin{array}{r} 175 + \\ \underline{53} \end{array}$$

$$\begin{array}{r} 128 + \\ \underline{141} \end{array}$$

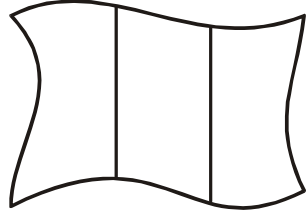
$$\begin{array}{r} 109 + \\ \underline{120} \end{array}$$

$$\begin{array}{r} 148 + \\ \underline{22} \end{array}$$


$$\begin{array}{r} 137 + \\ \underline{13} \end{array}$$

$$\begin{array}{r} 139 + \\ \underline{106} \end{array}$$

$$\begin{array}{r} 143 + \\ \underline{58} \end{array}$$



<i>Cantidad</i>	<i>C</i>	<i>D</i>	<i>U</i>	<i>Graficar</i>
<i>1D 3C 0U</i>				
<i>5U 4D 3C</i>				
<i>0D 2C 4U</i>				
<i>3C 4D 5U</i>				
<i>5D 7U 1C</i>				
<i>8U 2C 8D</i>				
<i>6D 1U 3C</i>				
<i>5D 2C 4U</i>				
<i>4U 4D 3C</i>				
<i>1D 2C 1U</i>				
<i>1C 8U 8D</i>				



**Descomposición de decenas.**

$347 = 300 + 40 + 7$

$251 = 200 + 50 + 1$

$364 = 300 + 60 + 4$

$332 = \underline{\hspace{2cm}}$

$338 = \underline{\hspace{2cm}}$

$374 = \underline{\hspace{2cm}}$

$269 = \underline{\hspace{2cm}}$

$120 = \underline{\hspace{2cm}}$

$388 = \underline{\hspace{2cm}}$

$335 = \underline{\hspace{2cm}}$



\* **Escribe el número anterior y posterior:**

       361                        371          


          390                        309          

          384                        300          


          362                        356          

          384                        342

\* *Escribe 7 números mayores que 350 y menores que 400*



\* *Escribe 6 números menores que 400 y mayores que 300*



\* *Ordena en forma ascendente.*




--	--	--	--	--	--	--	--	--	--

\* *Ordena en forma descendente.*



--	--	--	--	--	--	--	--	--	--

*Resuelve las sumas y las restas con símbolos*



☆ = 92

↑ = 60

♥ = 4

△ = 100

# LOGICO MATEMATICO

$$270 + \star =$$

$$314 + \star =$$

$$169 - \uparrow =$$

$$\heartsuit + 222 =$$

$$260 + \uparrow =$$

$$\heartsuit - 2 =$$

$$286 + \heartsuit =$$

$$\uparrow - 10 =$$

$$\triangle - 58 =$$

$$136 + \star =$$

$$\uparrow + \star =$$

$$\heartsuit + \star + \uparrow =$$

$$\triangle - \star - \heartsuit =$$

$$\uparrow + \uparrow - \star =$$

$$\triangle + \triangle + \triangle =$$

$$\triangle - \triangle =$$